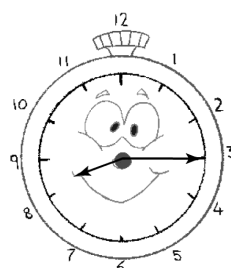
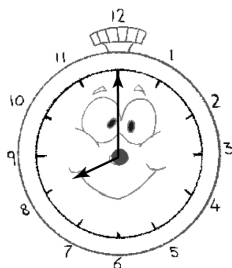


Name: _____

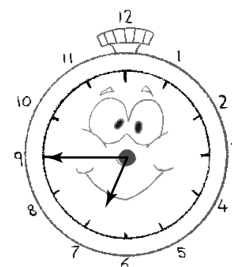
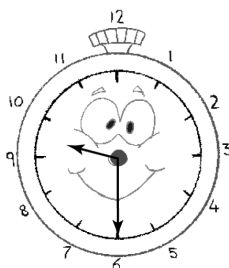
Telling Time

Read each sentence. Draw a line to the clock that shows the same time.

1. It's a quarter to seven.



2. It's half past nine.



3. It's ten o'clock.

4. It's a quarter past twelve.

5. It's a quarter to two.

6. It's twelve o'clock.

7. It's half past five.

8. It's a quarter past eight.

9. It's eight o'clock.

10. It's half past two.

